

BURNPUR RIVERSIDE SCHOOL

ASSIGNMENT : 2 (2021-2022)

ENGLISH

NURSERY

Maximum Marks:20

Name:_____ Sec.:_____ Roll No.:_____

Q1. Write capital letters I, L, T, E, M, H. (1X6=6)

Q2. Match the letters with the pictures. (1x5=5)

H
F
J
E
B



Q3. Match the letters.

($\frac{1}{2} \times 4 = 2$)

M .	.	L
E .	.	H
H .	.	E
L .	.	M

Q4. Write the first letter of the following pictures.

($1 \times 3 = 3$)






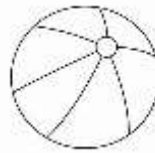


Q5. Circle the correct letter.

($\frac{1}{2} \times 4 = 2$)



A B F



B F E



I B H



F C D

Q6. Trace and colour the picture.

($2 \times 1 = 2$)



BURNPUR RIVERSIDE SCHOOL
ASSIGNMENT- 2:(2021 - 2022)
ENVIRONMENTAL STUDIES
NURSERY


Maximum Marks : 20

Name: _____ **Sec.:** _____ **Roll No. :** _____

Q1. Write the number of body parts .

(1 X 6 =6)

I have  ears

I have  fingers

I have  legs

I have  arms

I have  toes

I have  nose

1 2 3 4 5 6 7 8 9 10

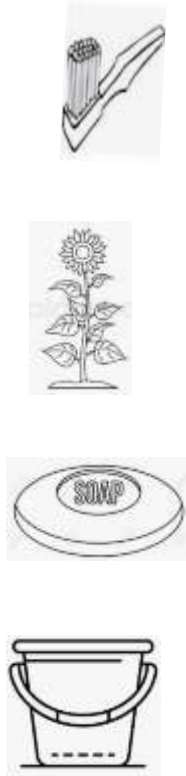
Q2. Circle the activities that need water.

(1x2=2)



Q3. Match the following correctly.

(1 X 4 =4)



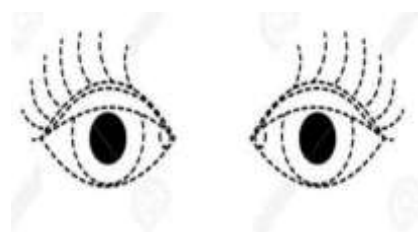
Q4. Put a tick (✓) or Cross (X) for the following sentences.

(1 X 5 =5)

- 1. We have two heads.
- 2. Water is important for all living things.
- 3. We write with our hands.
- 4. We need water for cleaning.
- 5. We have two eyes.

Q5. Trace the given lines and colour the picture.

(3x1=3)



BURNPUR RIVERSIDE SCHOOL
ASSIGNMENT: 2(2021-2022)
HINDI
NURSERY

Maximum Marks: 20

Name: _____ **Sec.:** ____ **Roll No.:** _____

1. चित्र देखकर सही अक्षर (वर्ण) से मिलाएँ :- (1x4=4)



उ



अ



ई



आ

2. वर्णों को वर्णों से मिलाएँ :-

(1X3=3)

ई •

• आ

आ •

• ऊ

ऊ •

• ई

3. चित्र देखकर सही अक्षर(वर्ण) पर गोला(O) लगाएँ :-

(1X4=4)



= आ , इ



= इ , ई



= इ , अ



= उ , ऊ


4. देखकर लिखें :-

(1X4=4)

आ	इ	ई	ऊ
_____	_____	_____	_____
_____	_____	_____	_____
_____	_____	_____	_____
_____	_____	_____	_____

5. रंग भरें :-

(5)



BURNPUR RIVERSIDE SCHOOL

ASSIGNMENT-2:(2021-2022)

**BENGALI
NURSERY**

Maximum Marks-20

Name:_____Sec.:____ Roll No.:_____

১। বর্ণ দেখে দেখে লেখো:

($\frac{1}{2} \times 6=3$)

(একটি করে লাইন ছেড়ে লিখবে)

ঈ	উ	উ
.	.	.
.	.	.

২. বর্ণগুলি সাজিয়ে লেখো :-

($1 \times 6=6$)

ই, উ, অ, ঈ, আ, উ

৩. ছবি দেখে সঠিক বর্ণে গোল করো :-

($1 \times 4=4$)



ও আ ঈ



ও উ অ



আ উ ঋ



ঐ এ হ

৪. ছবির সাথে বর্ণ মেলাও:-

(1X4=4)



গ



ও



অ



স

৫. ছবিতে সঠিক রঙ করো :-

(3x1=3)




BURNPUR RIVERSIDE SCHOOL
ASSIGNMENT-2: (2021-2022)
MATHEMATICS
NURSERY

Maximum Marks : 20


Name:_____ Sec.:__ Roll No.:_____

Q1. Count and match the following.


(1x6=6)



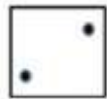
3




4




5



6



2



1

Q2. Fill in the missing numbers.

(1x4=4)

a. 1 _____ 3 _____ 5

b. 6 _____ 8 _____ 10

Q3. Count and write the following.

(1×4=4)



a. = _____



b. = _____



c. = _____



d. = _____

Q4. Write the numbers from 1 to 6.

(1×6=6)

_____	_____	_____
_____	_____	_____

